

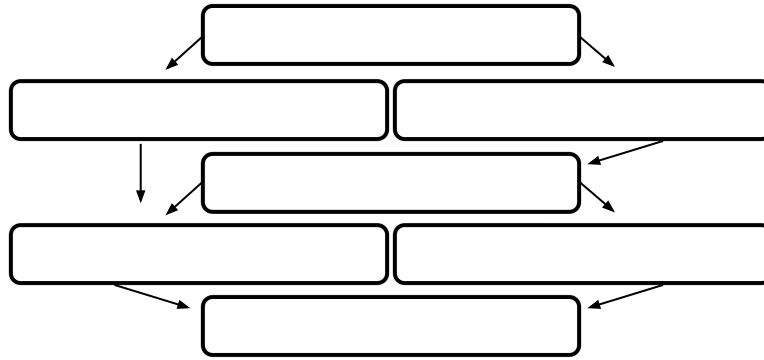
Name: _____

Daily Math Review
Week 34

Monday

Complete the hierarchy using all of the words.

Square, Rhombus, Kite, Quadrilateral, Rectangle, Parallelogram, Trapezoid




5.G.4

Tuesday

Draw two different quadrilaterals.

5.G.3



Find the volume.

9 cm.

3 cm.

3 cm.

5.MD.5

$$18.46 + 22.64 = \underline{\hspace{2cm}}$$

$$80 - 64.91 = \underline{\hspace{2cm}}$$

5.NBT.7

Wednesday

Put the shapes in order from smallest to greatest number of sides.

Hexagon, Rectangle, Decagon, Heptagon, Nonagon, Pentagon, Triangle, Octagon

_____ , _____ , _____ , _____ , _____ , _____ , _____ , _____

_____ , _____ , _____ , _____ , _____ , _____ , _____ , _____

5.G.4

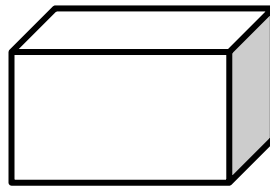
Name:

Daily Math Review
Week 34

Thursday

Draw two different 5-sided polygons.

5.G.3



Find the volume.

5.MD.5

$$34.3 \times 16.4 = \underline{\hspace{2cm}}$$

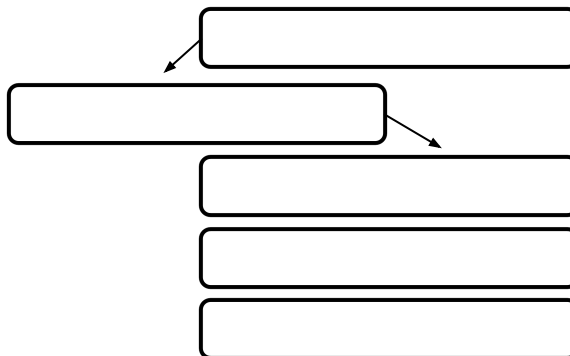
$$479.7 \div 24.6 = \underline{\hspace{2cm}}$$

5.NBT.7

Friday

Complete the hierarchy using all of the words.

Obtuse, Triangle, Polygon, Equilateral, Acute



5.G.4

Extra Work Space