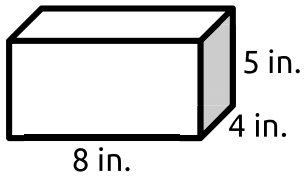


Name: _____

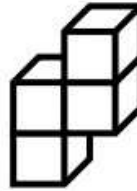
Daily Math Review
Week 30

Monday



Find the volume.

_____ 5.MD.5



Find the volume.

_____ 5.MD.3-4

$$\frac{1}{4} \div 6 =$$

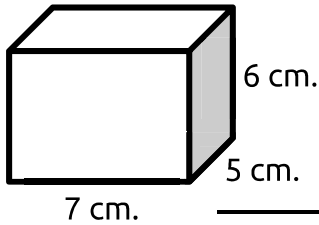
$$9 \div \frac{1}{3} =$$

5.NF.7

Write the number in expanded form.
1,884.2

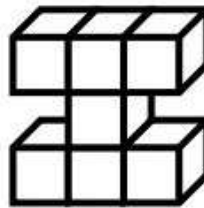
_____ 5.NBT.3

Tuesday



Find the volume.

_____ 5.MD.5



Find the volume.

_____ 5.MD.3-4

$$\frac{1}{4} \div 3 =$$

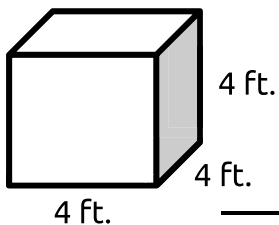
$$9 \div \frac{1}{5} =$$

5.NF.7

Write the number in standard form.
One thousand twelve and fifty-four hundredths

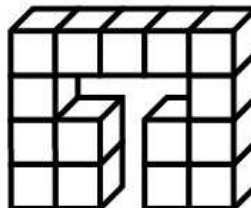
_____ 5.NBT.3

Wednesday



Find the volume.

_____ 5.MD.5



Find the volume.

_____ 5.MD.3-4

$$\frac{1}{7} \div 2 =$$

$$6 \div \frac{1}{6} =$$

5.NF.7

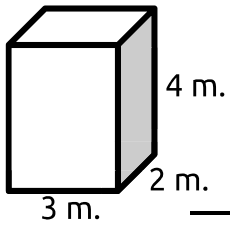
Write the number in word form.
31.49

_____ 5.NBT.3

Name: _____

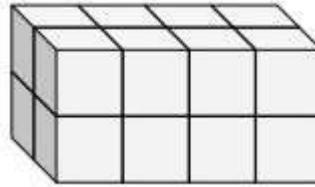
Daily Math Review
Week 30

Thursday



Find the volume.

5.MD.5



Find the volume.

5.MD.3-4

$$\frac{1}{6} \div 8 =$$

$$2 \div \frac{1}{9} =$$

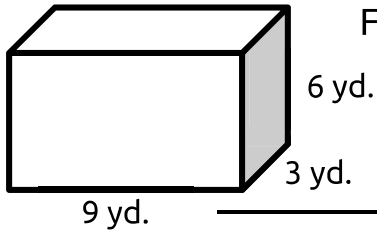
5.NF.7

Write >, <, or = to compare the numbers.

$$17.85 \bigcirc 17.85$$

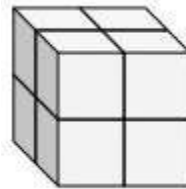
5.NBT.3

Friday



Find the volume.

5.MD.5



Find the volume.

5.MD.3-4

$$\frac{1}{2} \div 5 =$$

$$4 \div \frac{1}{9} =$$

5.NF.7

Write >, <, or = to compare the numbers.

$$2.59 \bigcirc 2.6$$

5.NBT.3

Extra Work Space